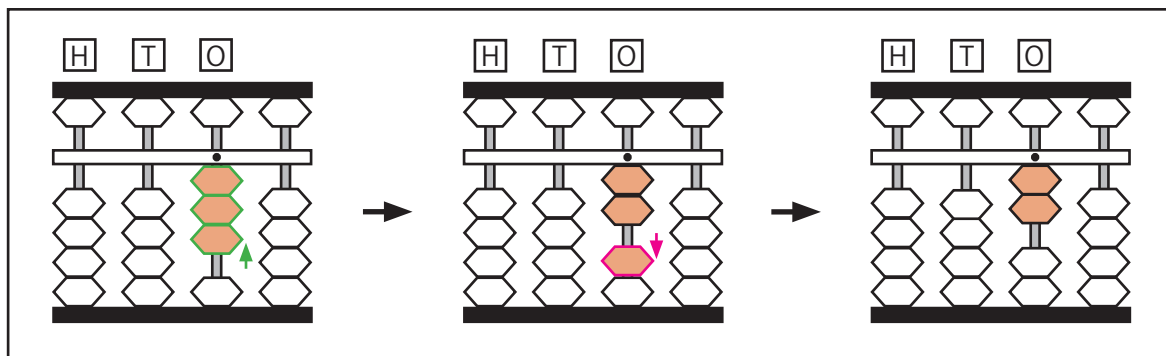


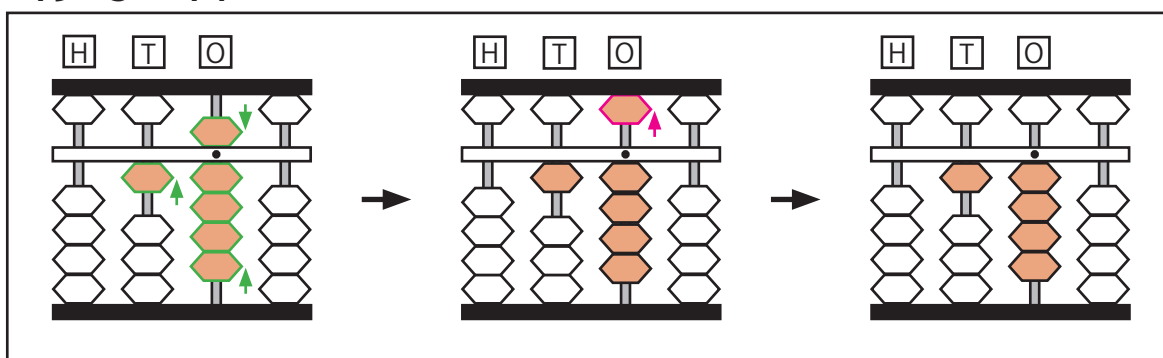
### Soroban Practice 5: Subtracting numbers

Try the example sums on your own soroban. Do your answers match the soroban picture? Use your soroban to answer questions 1 – 8.

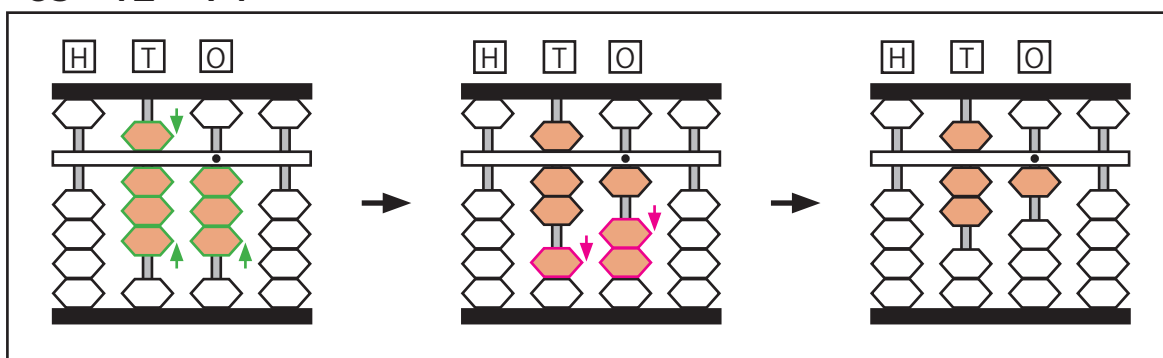
$$3 - 1 = 2$$



$$19 - 5 = 14$$



$$83 - 12 = 71$$



### Your turn to try!

$$1) 4 - 2 = 2$$

$$2) 6 - 5 = 1$$

$$3) 9 - 3 = 6$$

$$4) 62 - 11 = 51$$

$$5) 94 - 21 = 73$$

$$6) 49 - 35 = 14$$

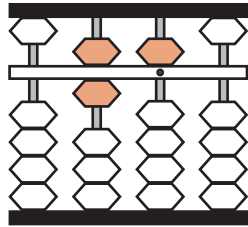
$$7) 27 - 11 = 16$$

$$8) 78 - 26 = 52$$

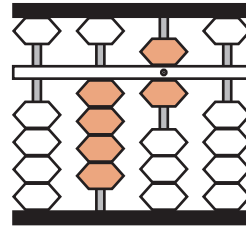
### Soroban Practice 5

Use your soroban to do the sum, then circle the soroban picture which shows the correct answer.

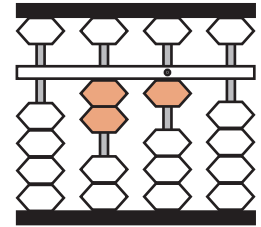
$43 - 22 =$



a

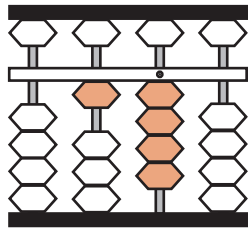


b

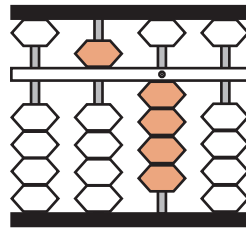


c

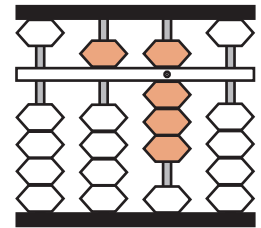
$84 - 30 =$



a

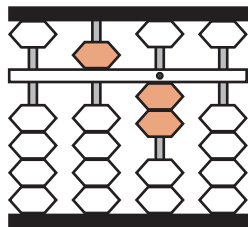


b

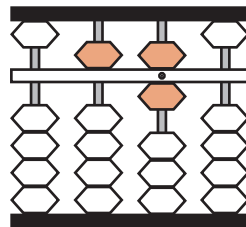


c

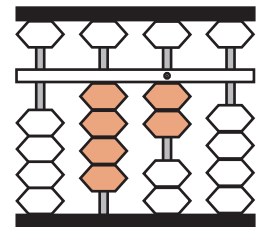
$99 - 47 =$



a

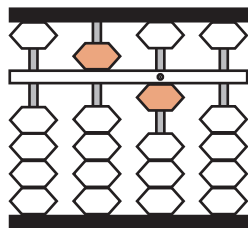


b

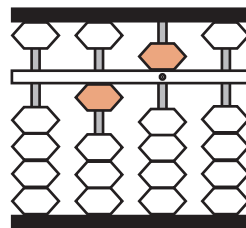


c

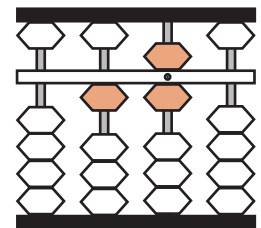
$26 - 11 =$



a

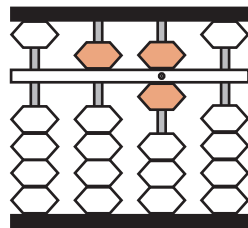


b

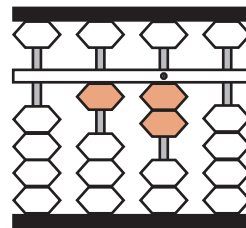


c

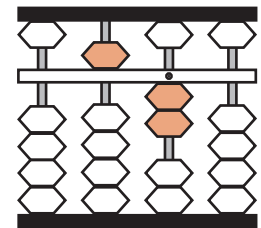
$69 - 17 =$



a



b



c