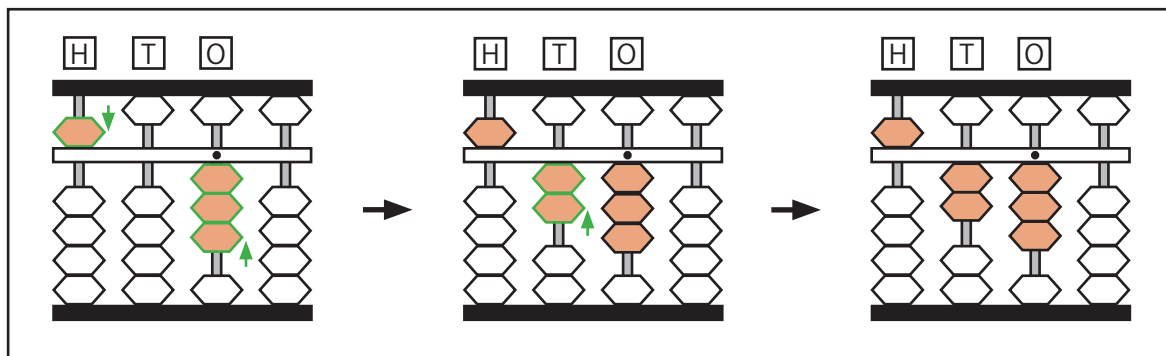


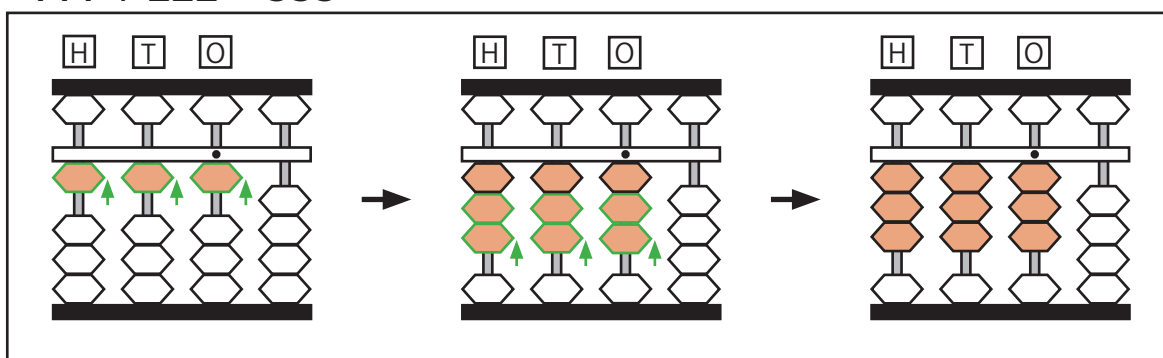
## Soroban Practice 4c: Adding numbers above 100 (Tens + Hundreds)

Try the example sums on your own soroban. Do your answers match the soroban picture? Use your soroban to answer questions 1 – 8.

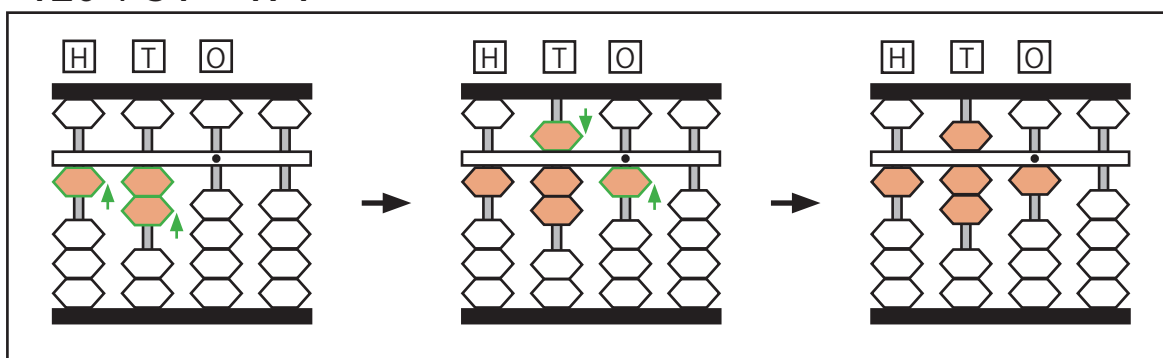
$$503 + 20 = 523$$



$$111 + 222 = 333$$



$$120 + 51 = 171$$

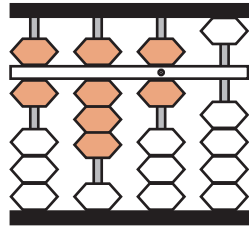


### Your turn to try!

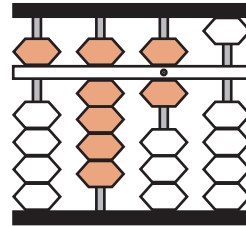
- |                  |                  |                 |                  |
|------------------|------------------|-----------------|------------------|
| 1) $850 + 19 =$  | 2) $280 + 16 =$  | 3) $760 + 24 =$ | 4) $123 + 121 =$ |
| 5) $304 + 130 =$ | 6) $533 + 201 =$ | 7) $407 + 21 =$ | 8) $621 + 152 =$ |

Use your soroban to do the sum, then circle the soroban picture which shows the correct answer.

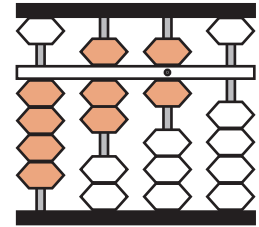
$134 + 462 =$



a

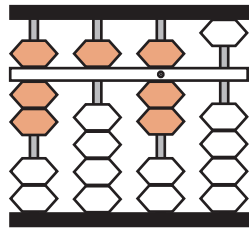


b

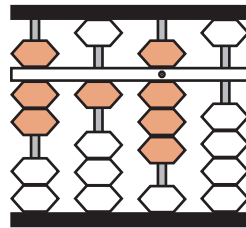


c

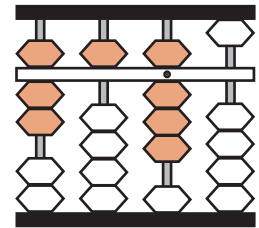
$701 + 17 =$



a

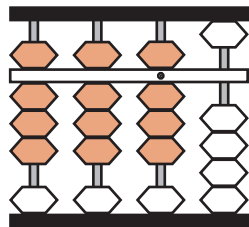


b

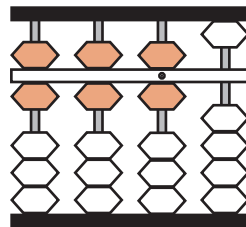


c

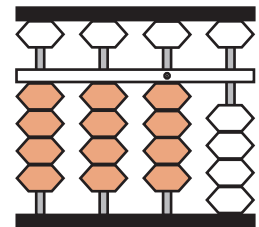
$321 + 123 =$



a

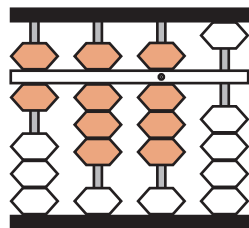


b

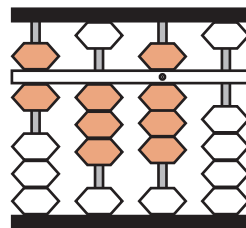


c

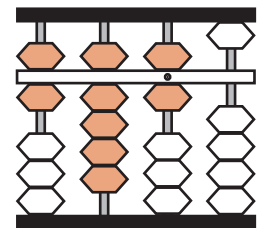
$82 + 606 =$



a

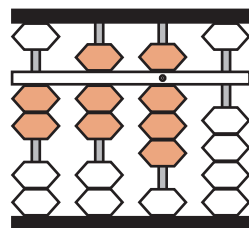


b

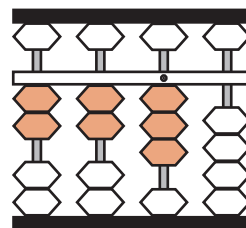


c

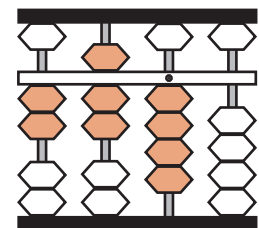
$221 + 53 =$



a



b



c